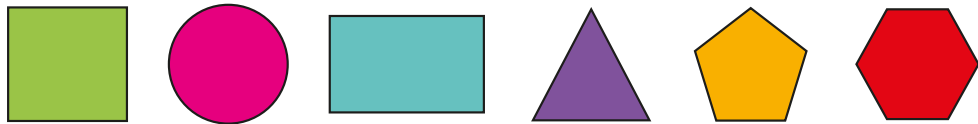
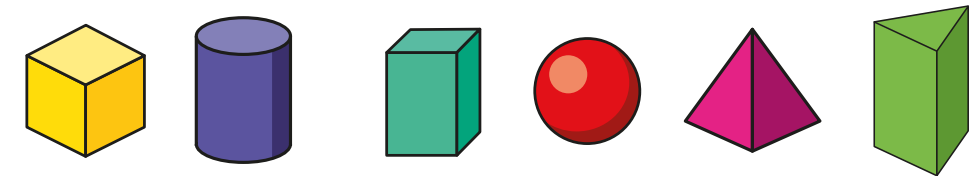


1 Match the shape to its name.



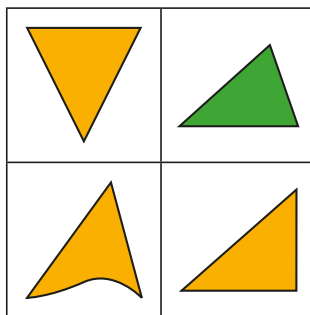
circle   hexagon   pentagon   square   triangle   rectangle

2 Match the shape to its name.



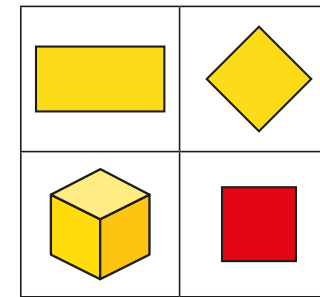
cuboid   triangular prism   cube   pyramid   sphere   cylinder

3 Which shape is the odd one out?




Why did you choose this shape?

4 Which shape is the odd one out?



Compare answers with a partner.

5 Here are some shapes.



How many of each shape are there?

How did you count them?

How do you know you have got them all?

Talk about it with a partner.