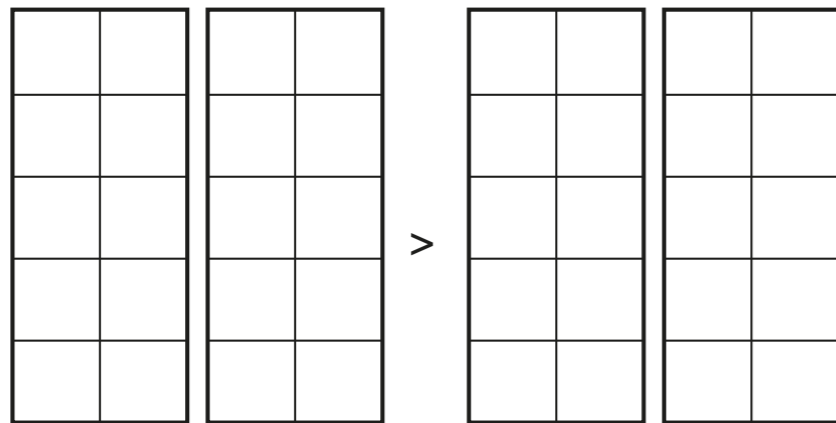


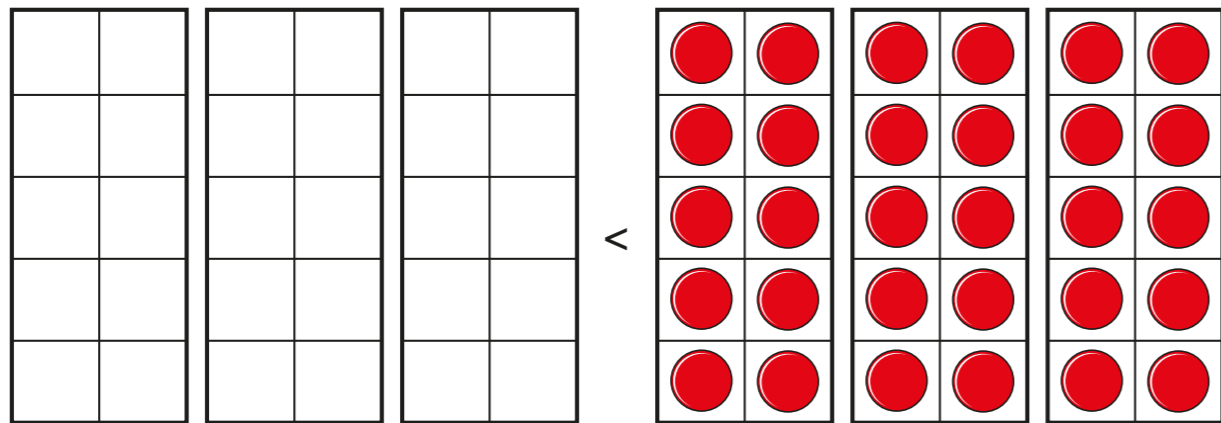
Compare numbers

1 Draw counters to represent the sentences.

a) 15 is greater than 14



b) 21 is less than 30



2 Write the missing phrase.

greater than

less than

equal to

a) 31 is _____ 34

b) 18 is _____ 8

c) seventy is _____ seventeen

d) $40 + 5$ is _____ 45

e) 9 tens is _____ 9 ones

f) 23 ones is _____ $30 + 7$

3 Write $>$, $<$ or $=$ to compare the numbers.

a) 47 74

d) 71 70

b) 19 90

e) 8 tens 9 ones

c) 15 ones 2 tens

f) 30 ones 3 tens



4 Complete the sentences.

a) Forty-eight is greater than _____.

b) < 15

c) 6 tens =

d) $30 + 9 <$

e) > 11

Is there more than one answer for each?


Talk about it with a partner.

5 Write $>$, $<$ or $=$ to compare the numbers.

a) $50 \bigcirc 50 + 7$ c) $50 \bigcirc 40 + 17$

b) $10 + 20 \bigcirc 10 + 16$ d) 30 ones $\bigcirc 10 + 19$

6 Rosie is thinking of a number.



It is more than 32
but less than 35

What number could Rosie be thinking of?

7 Complete the number sentence.

$$21 < \square < 30$$

Are there any other answers?

How do you know you have found them all?

8 2 tens and 13 ones is less than 3 tens.

Is the statement true or false?

Use base 10 to represent your answer.

